

Looking for a math challenge?

Solve these prom jewelry equations sure to make you feel like 100


$$+ + + = 15$$


$$+ + = 5$$


$$+ + = 4$$



$$+ + = ?$$


Looking for a math challenge?

Solve these prom jewelry equations sure to make you feel like 100


$$3 \times \text{Headband} = 30$$





$$2 \times \text{Earrings} + 2 \times \text{Bracelets} = 19$$


$$1 \times \text{Bracelet} + 4 \times \text{Earrings} = 11$$


$$1 \times \text{Bracelet} + 2 \times \text{Earrings} + 1 \times \text{Headband} = ?$$

Looking for a math challenge?




Solve these prom jewelry equations sure to make you feel like 100





 $+$

 $+$

 $= 27$


 $+$

 $+$

 $= 11$


 $+$

 $+$

 $= 10$


 $+$

 $+$

 $= ?$

Looking for a math challenge?

Solve these prom jewelry equations sure to make you feel like 100

ANSWER KEY!

Glam BOUTIQUE Looking for a math challenge?
Solve these prom jewelry equations sure to make you feel like 100

 = 15

 = 5


 = 4


 = 8

At Home With Claire's

Glam BOUTIQUE Looking for a math challenge?
Solve these prom jewelry equations sure to make you feel like 100

 = 30

 = 19

 = 11

 = 20

At Home With Claire's

Glam BOUTIQUE Looking for a math challenge?
Solve these prom jewelry equations sure to make you feel like 100

 = 27

 = 11

 = 10

 = 16

At Home With Claire's